

MAMTA MODERN SR. SEC. SCHOOL

Class 3 Worksheet 1

Sentences and Punctuation

Q1. Rearrange the following group of words to make meaningful sentences.  
Remember to use capital letters, full stops and question marks.

a) fire/stopped/in/day/one/the/palace/the/burning

---

b) the/messenger/to/king/ordered/some/embers/bring/his/back

---

c) the/have/to/children/gone/school

---

d) today/early/came/the/school/bus

---

e) celebrating/our/school/tomorrow/we/children's day/in/are

---

f) you/to/plan/celebrate/birthday/do/your/how

---

Q2. Choose the correct interjection. Remember to use exclamation marks.

( hurrah    wow    shh    ouch )

a) \_\_\_\_\_ what a beautiful drawing you have made.

b)\_\_\_\_\_ I have pricked my finger with a thorn.

c)\_\_\_\_\_the summer holidays have begun.

# कक्षा तीसरी

## कार्य प्रपत्र - 1

1. भाषा की रेलगाड़ी के खाली डिब्बों में लिपि का नाम लिखो—



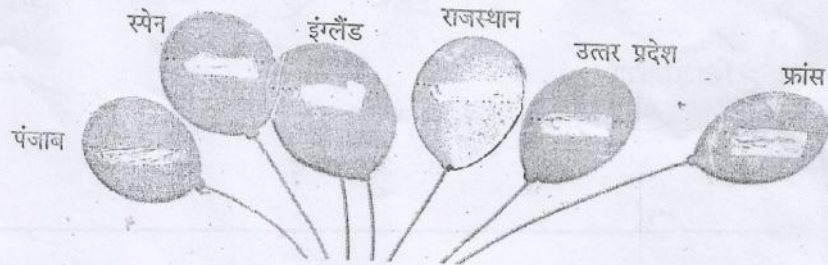
2. लिखित, मौखिक व सांकेतिक भाषा के दो-दो उदाहरण लिखो—

लिखित भाषा — .....  
 मौखिक भाषा — .....  
 सांकेतिक भाषा — .....

3 ये भाषा के कौन-से रूप हैं—

क. एफ.एम. रेडियो सुनना — .....  
 ख. टेलीफोन पर बात करना — .....  
 ग. परीक्षा में उत्तर लिखना — .....  
 घ. जेबरा क्रॉसिंग पर सड़क पार करना — .....  
 ङ. कहानी सुनना — .....

4 गुब्बारों में संबंधित भाषा का नाम लिखो—



5 सही कथन के आगे ✓ व गलत कथन के आगे X लगाओ—

क. गाना लिखित भाषा का रूप है।   
 ख. अंग्रेज़ी को रोमन लिपि में लिखा जाता है।   
 ग. भाषा के नियमों को व्याकरण कहते हैं।   
 घ. सभी भाषाओं की अपनी-अपनी लिपि होती है।

6 नीचे बने चित्रों को देखो। जो हम भाषा की मदद से करते हैं, उनपर ✓ का निशान लगाओ और जिनके लिए भाषा की आवश्यकता नहीं है, उनपर ✗ का निशान लगाओ—



7.

चित्र में रंग भर कर इन शब्दों की सहायता से मेरी कक्षा विषय पर अनुच्छेद लिखिए।



कमरा

बड़ा

चित्र

हवादार

श्यामपट्ट

चार्ट

किताब

मित्र

दरवाजे

अध्यापिका

चाक

खिड़कियाँ

पंखे

अनुच्छेद

---



---



---



---



---



---

# WORKSHEET -1

CLASS: III

MATHS

1.. Who am I :

1) If you add me to 7, you get 16

I am number\_\_\_\_\_.

2) If you add me to 8, you get 8.

I am number\_\_\_\_\_.

3) If you add me to 7 and 19, you get 40.

I am number\_\_\_\_\_.

4) If you add me to highest two-digit number, you get 120.

I am number\_\_\_\_\_.

2. Write the following numbers in numerals and colour these numbers in the number puzzle.

a. Six thousand eight hundred and seventy two\_\_\_\_\_.

b. Four thousand nine hundred and sixty nine\_\_\_\_\_.

c. Three thousand nine hundred and thirty nine\_\_\_\_\_.

d. Seven thousand six hundred and sixty six\_\_\_\_\_.

e. Eight thousand four hundred and seventy eight\_\_\_\_\_.

f. Four thousand four hundred and forty four\_\_\_\_\_.

## Number Puzzle

4969	4698	6870	8578
5678	6872	7654	3939
7890	4567	7666	6765
8478	3456	8652	4444

# WORKSHEET

SCIENCE

CLASS: III

## OUR FOOD: GROWTH AND ENERGY

Q1.Name these:




a)Food which protect us from diseases \_\_\_\_\_

b)A diet which contain all the nutrients \_\_\_\_\_

c)Kind of food present in potatoes and sweet potatoes \_\_\_\_\_

d)2Examples of body building food \_\_\_\_\_ , \_\_\_\_\_

Q2.Complete the table:

S.No.	FOOD ITEM	NAME OF THE NUTRIENT	HOW DOES IT HELP?
1			
2			
3			

Q3.Give reasons:

a) We should always eat balanced diet.

---

---

b) Children need more body building food than an adult.

---

---

c) Cooking of some food items is necessary.

---

---

d) Cut fruits should not be left for long.

---

---

Q4. Identify the following food group and also write their importance:

a)

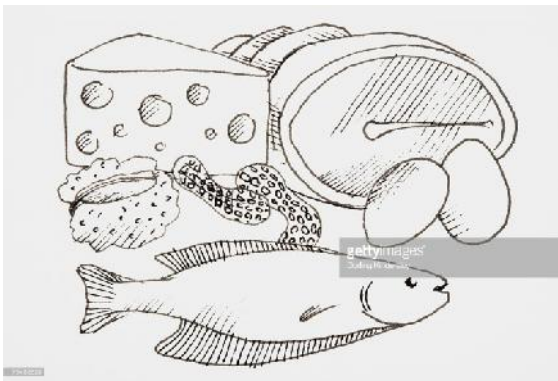


---

---

---

b)



---

---

---

---

Class III

SOCIAL STUDIES

Worksheet 1 (L1)

**Q1. Name the following:**

- 1) The fixed path on which the planets revolve around the Sun \_\_\_\_\_
- 2) Largest member of the Solar system \_\_\_\_\_
- 3) The natural satellite of the Earth \_\_\_\_\_
- 4) The first living thing to travel in space \_\_\_\_\_
- 5) The first man to go into space \_\_\_\_\_
- 6) The first Lunar mission of India \_\_\_\_\_
- 7) The movement of Earth around the Sun \_\_\_\_\_

**Q2. Differentiate between:**

Astronomer	Astronaut

Galaxy	Constellation

Planet	Star

**Q3. Give reason:**

The Sun is extremely important for us.

---

---

Planets do not twinkle.

---

---

We can't see stars during daytime.

---

---

**Q4. Correct the statements:**

1. Neptune is a dwarf planet.

---

2. Plants prepare their food with the help of moonlight

---

3. Revolution of Earth around the Sun causes Day and night.

---

**Q5. Write the nicknames for the following planets:**

1 Mercury \_\_\_\_\_ 2 Earth \_\_\_\_\_

3 Venus \_\_\_\_\_ 4 Saturn \_\_\_\_\_

**Q6. Arrange the following planets in order according to their distance from the Sun.**

Jupiter          Venus          Neptune          Mars          Earth  
                         Mercury          Saturn          Uranus

---