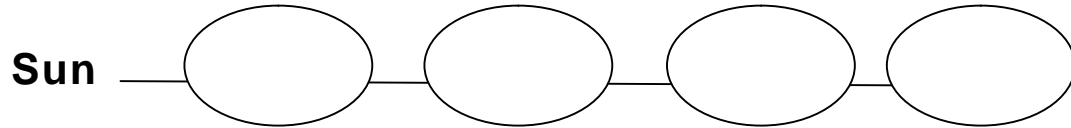


MAMTA MODERN SR. SEC.SCHOOL  
WORKSHEET 1

CLASS – II

SUBJECT: ENGLISH

Q1. Make a word chain:



Q2.Fill in the blanks with a/an or the

1. \_\_\_\_\_ bird is flying in \_\_\_\_\_ sky.
2. \_\_\_\_\_ earth goes around \_\_\_\_\_ sun.
3. Take \_\_\_\_\_ umbrella when you go out in \_\_\_\_\_ rain.
4. \_\_\_\_\_ old man cannot become \_\_\_\_\_ young boy again.
5. \_\_\_\_\_ man is sitting under a tree.
6. \_\_\_\_\_ aeroplane is flying in the sky.
7. \_\_\_\_\_ dog is barking.
8. This is \_\_\_\_\_ cat. \_\_\_\_\_ cat is black in colour.

## कार्य प्रपत्र - 1

1 अपनी मनपसंद चीजों के नाम लिखो :

(क) खाना : .....


(ख) रंग : .....

(ग) पोशाक : .....

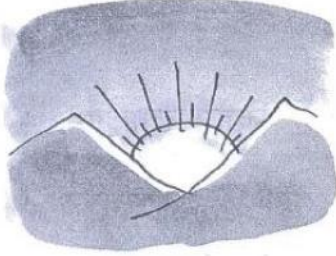
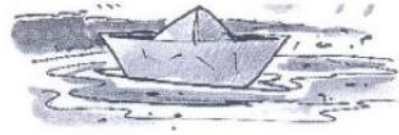
(घ) खेल : .....

(ङ) किताब : .....

2 चित्र देखो। खाली खाने में एक वर्ण भरकर दो शब्द बनाओ।




दि	
	दी



स	वे	
		त



प	क		न
---	---	--	---



यु
या
न



# WORKSHEET- 1

## TOPIC – NUMBERS AND NUMERATION

Q1 Write the missing numbers .

Colour the boxes red whose number names end with "y"

Colour the boxes yellow whose number names end with "n"

1									10
	12								
			24						
					36				
			44						50
		53							
			64						
				75					
81					86				
		93							100

Q2) Make a bigger a smaller number using the two digits given below

a) 3 and 6

\_\_\_\_\_ > \_\_\_\_\_

b) 4 and 1

\_\_\_\_\_ > \_\_\_\_\_

c) 5 and 9


\_\_\_\_\_ > \_\_\_\_\_

d) 1 and 7

\_\_\_\_\_ > \_\_\_\_\_

EVS WORKSHEET-1

Q1 Identify the body part or organ and name it.



Q2 Unjumble the following to name the different parts of the body:

- 1. HOMUT -----
- 2. EEKN -----
- 3. RNGIEF -----
- 4. NUTRK -----
- 5. HECTS -----

Q3 Name the sense organ which will help you experience the following things.

- (a) Sweet taste of Chocolates
- (b) Chillness of ice
- (c) Chirping of birds
- (d) Smell of perfume
- (e) To Watch movies

Q4 Fill in the blanks.

- a) Lemon has a \_\_\_\_\_ taste.
- b) Our body has \_\_\_\_\_ bones.
- c) \_\_\_\_\_ and \_\_\_\_\_ work together to make our body run ,play and move.
- d) \_\_\_\_\_ pumps blood to all parts of all the body.
- e) Brain is an \_\_\_\_\_ organ.

Q5 Cross the odd one to each group.

a) Heart Stomach Hands Brain Lungs

b) Healthy Sour Bitter Sweet Salty

c) Nose Ears Eyes Waist Skin

d) Pure Air Digest Lungs Breathe Impure Air

