

ENGLISH-WORKSHEET NO. 2

DESCRIBING PEOPLE



Read the following description. Write short descriptions of your:

1. Grand mother

2. Best friend

Eg:

She is thirty five of age. She has roundish face and fair complexion. She has black long hair. She has a beautiful smile .She is fond of cooking.She is very loving , caring and kind.



SOCIAL STUDIES

WORKSHEET-2

CH-3(THE NORTHERN MOUNTAINS)

Q1 Answer the following in brief:-

1. Name any two highest peaks of Himadri.

2. Define Glacier.

3. Who described Kashmir as 'Heaven on Earth'?

4. Which is the main festival of Himachal Pradesh?

5. Which tribe is famous for growing root bridge trees?

Q2 Think and Answer:-

Himalayas are very important for us.

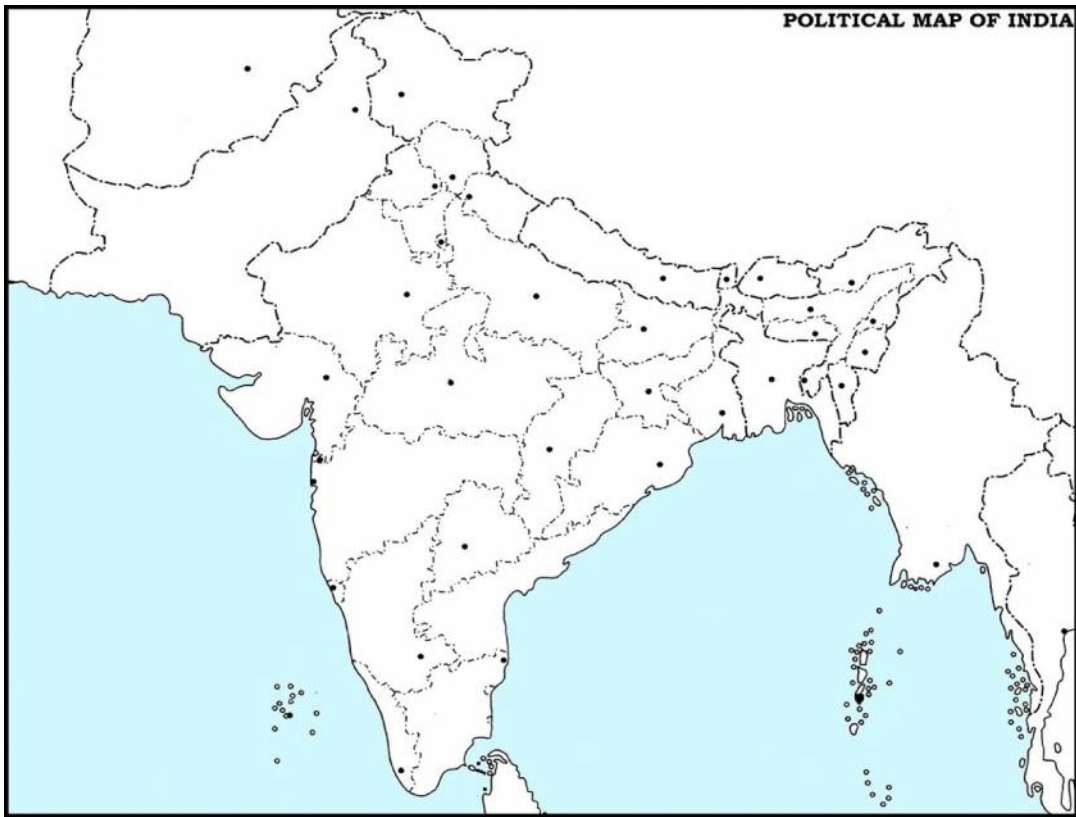
Q3 Distinguish between Himadri and Himachal.

Himadri	Himachal

Q4 What is the occupation of the people of Jammu and Kashmir?

Q5 Mark and colour the following:-

- a) A state that receives the heaviest rainfall
- b) Tripura
- c) A state that is famous for tea plantations
- d) Sikkim
- e) Largest state among the Seven Sisters



MATHEMATICS WORKSHEET -2

1. Which fraction is the smallest?

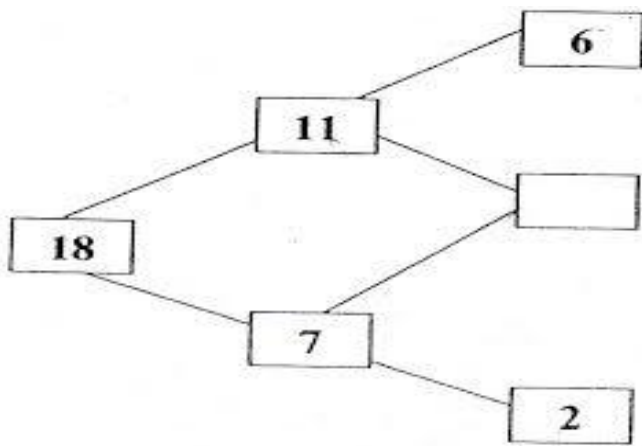
$3/5, 1/2, 2/3, 4/7, 3/8$

2. What do I need to add to 0.93 to make 1?

3. Write down all the factors of 18

	<input type="text"/>	<input type="text"/>
<input type="text"/>	<input type="text"/>	<input type="text"/>
		<input type="text"/>

4. Study the pattern and fill the missing number



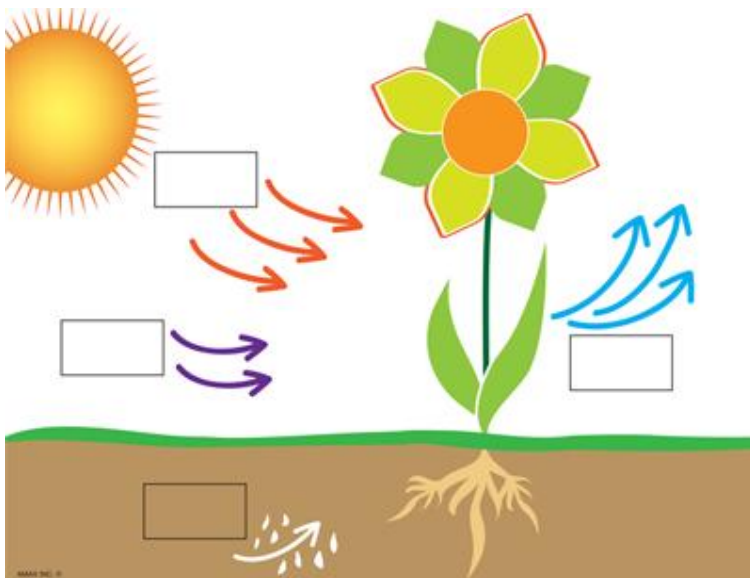
5 What is the value of $3 - 2$, if 😊 = 4 😊

WORKSHEET OF SCIENCE

Care And Protection Of Plants

CLASS IV SEC: _____ Name _____ Roll no _____

Q1 . Look at the given picture :




(i) What does this picture show , name the process.

(ii) What will happen if plants are not watered and manured timely ?

Q2. Name them :

- (i) People who grows crops in fields. _____
- (ii) Chemicals used to protect the plants from pests. _____
- (iii) Thousands of trees are planted during this occasion. _____
- (iv) The cutting down of trees on a large scale. _____

Q3. Observe the picture and answer the following questions :



(i) What will happen to the plant which is regularly watered ?

(ii) What will happen to the other plant ?

(iii) What does it show ?
