

MAMTA MODERN SR. SEC. SCHOOL

ENGLISH

READER WORKSHEET

CLASS IV

Q.1 Write the meaning of the following words.

- 1) inaugurate _____
- 2) shrugged _____
- 3) mystery _____
- 4) beneath _____
- 5) giant _____

Q.2 Write antonym of following words

- 1) later _____
- 2) bright _____
- 3) sharp _____
- 4) forward _____
- 5) unconscious _____
- 6) remember _____
- 7) dirty _____
- 8) grand _____

Q.3 Make sentences using following phrases

- 1) burst into _____
- 2) face fell _____
- 3) shot off _____
- 4) slumped over _____
- 5) chewed into _____

Q.4 Answer in brief-

- 1) Which trains are called as “clean trains”?

2) List two big events happened in 1911?

3) “what clever children you are!”

a. Who said these words to whom?

b. Why does the speaker call the children clever?

4) What was the mystery for Putta and Putti?

Q.5 Change the tense of following words

- 1) frowned _____
- 2) nod _____
- 3) built _____
- 4) checked _____
- 5) change _____

Grammar worksheet (Class IV)

Q.1 Rewrite the following sentences with correct punctuation and identify the types of sentence

i. what do you know about our culture

.....

ii. congratulations on your achievement

.....

iii. he is the leader of your group

.....

iv. can you cancel the concert

.....

Q.2 Write the synonyms of following words from the box given below;

Belong	Elect	Rattle	Offer
--------	-------	--------	-------

i. Her classmates chose president of the student council.

ii. The store presents a 25% discount on all clothing section.

iii. The monkey grabbed the bars of his cage, and shook them.

iv. This store has been the property of to our family for three generations.

Q.3 Underline the nouns and change the gender and rewrite the sentences;

i. His father is a lawyer.

.....

ii. The empress put the flowers in the vase.

.....

iii. The duke lived alone in that castle.

.....

iv. His brother is a tailor.

.....

v. The man gave the waitress a handsome tip.

.....

Q.4 Complete the following sentences

- i. The waiter
- ii. Wrote a new book
- iii. The teacher
- iv. was waiting for patients

Q.5 Rearrange the given words to form meaningful sentences i.

the/ please/ not/ do/ on/ grass/ step

..... ii.

to/ the/ company/ goods/ Japan/ export

..... iii.

should/ you/ have/ coming/ seen/ this

..... iv.

you/ where/ have/ this/ all/ while/ been?

.....

Q.6 Write the plural form of the following words

- i. Half
- ii. Scarf
- iii. Watch
- iv. Church
- v. Potato
- vi. Ox
- vii. Quiz
- viii. Scissors
- ix. Wolf
- x. Dictionary

कार्य - पत्रक - (2019-20)

विषय - हिंदी

कक्षा - चौथी

प्र०1 पंक्ति पढ़कर दिए गए प्रश्नों के उत्तर लिखें -

“ मैं प्यवरा गया । हाथ - पाँव समेटकर चुपचाप पड़ा रहा । बाहर लाकर उसने मुझे ज़मीन पर पटक दिया और ज़ोर - ज़ोर से अपने दोस्तों को पुकारने लगा । --- ”

(i) इन पंक्तियों के पाठ का नाम और लेखिका का नाम लिखें ।

(ii) यहाँ 'मैं' और 'उसने' कौन - कौन हैं ? नाम लिखें ।

(iii) वह अपने दोस्तों को क्यों पुकारने लगा ?

(iv) विलोम शब्द लिखें - बाहर - ज़मीन -

(v) 'दोस्त' शब्द के दो पर्यायवाची शब्द लिखें -

प्र०2 दिए गए शब्दों के अर्थ लिखकर वाक्य बनायें -

तावड़ी -

विचित्र -

शौथ -

मदद -

प्र०३ 'अनुपम' - पाठ-2 तथा पाठ-5 के आधार पर रिक्त स्थान भरें -

- (i) ताल में _____ हलचल हुई।
- (ii) मैं _____ से बेहाल हो गया।
- (iii) _____ की क्रिकेट टीम को 'किवी' कहते हैं।
- (iv) छात्रावास के एक तरफ _____ ही है।
- (v) किवी फल में विटामिन-सी और विटामिन-ई _____ मात्रा में होते हैं।

प्र०४ हमें प्रकृति से बहुत-सी वस्तुएँ मुफ्त में मिलती हैं। हम उनका सदुपयोग कैसे करेंगे ?

प्रश्न 5. दिए गए शब्दों में से सार्थक शब्द अलग कीजिए :-

भोजन कौथल लागुब घवा हिरन जवली खीर

(क) सार्थक शब्द :-

प्रश्न 6 इ औ ढ का प्रयोग करते हुए शब्द पूरे करें-

प ना स क पक च ई

प्रश्न 7 वर्ण-विच्छेद कीजिए :-

क) हाथी - _____

ख) घर - _____

ग) आकाश - _____

घ) गृह - _____

ङ.) कैला - _____

प्रश्न 8 निम्नलिखित देशों की भाषाएँ लिखिए :-

क) रूस _____

ख) जापान _____

ग) इंग्लैंड _____

घ) फ्रांस _____

ङ.) स्पेन _____

CLASS- IV MATHS HOLIDAYS H.W.
WORKSHEET-1

Q1. Add 47526 to the largest 5 digit number.

Ans-

Q2. Add the predecessor and successor of 56789.

Ans-

Q3. Form the greatest and smallest 6 digit number from 8, 3,0,2,7, 5 and add them.

Ans-

Q4. Write in short form and add:-

a) $700000 + 6000 + 300 + 4 =$

b) $5 \text{ lakhs} + 4 \text{ thousand} + 6 \text{ tens} + 2 \text{ ones} =$

$400000 + 500 + 20 + 1 =$

$3 \text{ lakhs} + 2 \text{ ten thousand} + 5 \text{ ones} =$

Their sum =

Their Sum =

Q5. Find the sum of place values of the underlined digits.

a) $6 \underline{9} 5 \underline{3} 84$

b) $3 \underline{8} 4 \underline{7} 2 \underline{9}$

c) $\underline{6} 350 \underline{89}$

Q6. Write in figures and add:-

Fifty lakh seventy four thousand one hundred twelve =

Thirty five lakh six thousand fourteen =

Their sum =

Q7. Arrange in column and add:-

a) $4,04,567 + 12,08,115$

b) $8090 + 2,45,101 + 67,999$

Q8. Find the number which is:-

a) 1000 more than 72,899- _____

d) 4 hundreds more than 45,789- _____

b) 5500 more than 15,076- _____

e) 8 ones more than 30,555- _____

c) 6 tens more than 7000- _____

f) 180 more than 7065- _____

Q9. Fill in the boxes:-

a)
$$\begin{array}{r} 63429 \\ + 1768 \\ \hline 82\boxed{2} \end{array}$$

b)
$$\begin{array}{r} 7284 \\ + \boxed{0}97 \\ \hline 8\boxed{0}51 \end{array}$$

Q10. Word Problems:-

a) A tea plucker plucked 412250, 334278 and 45600 tea leaves on three successive days. How many tea leaves were plucked in all during these days?

Solution-

b) Mrs. Romi bought 78543 sacks of potatoes and Mrs. Bharti bought 6789 sacks more than Mrs. Romi. Find the number of sacks bought by Mrs. Bharti. Also find the total number of sacks bought by both of them.

CLASS- IV MATHS HOLIDAYS H.W.

WORKSHEET-2

Q1. Draw line segments of following lengths-

a) 5.6 cm

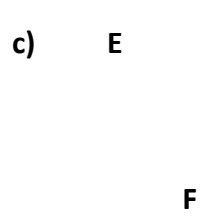
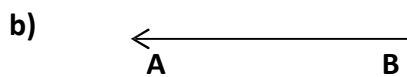
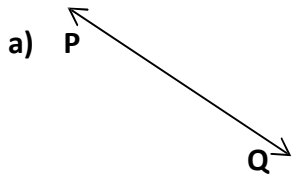
b) 7.5 cm

c) 4.8 cm

Q2. Write difference between:-

S.NO.	LINE	LINE SEGMENT	RAY


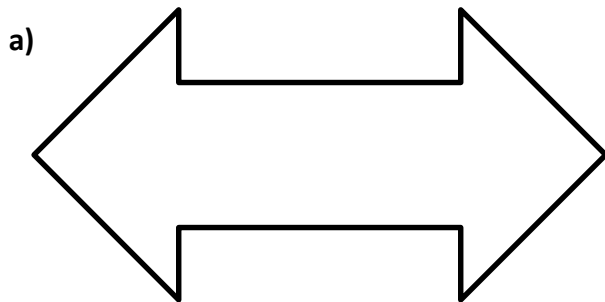
Q3. Name the figures given below:-




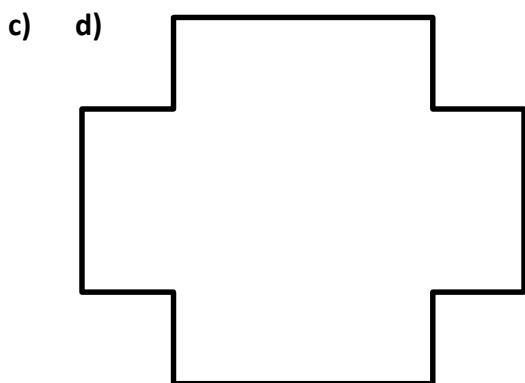
d) .X

Ans-

Q4. Count and write the number of line segments in the following figures:-




Ans- _____



Ans- _____

Q5. Identify the following:-



vertices.


i. This is a _____

ii. This is _____ in shape.

iii. It has _____ faces, _____ edges and _____

iv. Its all the faces are _____.

Q6. Draw and name two examples of cuboid that we use in our daily life.



Q7. Mark a point **X** . Draw as many as lines as possible through this point. What are these lines called?

Q8. In each of the following, join the points in all possible ways by using the scale. Now count and write how many line segments have you drawn.

a) . **W**

x . . y

z.

b) **A** . . B

C .

. D

E .

. F

MAMTA MODREN SR. SEC SCHOOL

Class IV-Science

WORKSHEET -1, PLANT LIFE

Q1. Name the following :-

a. Green coloured pigment present in leaves _____

b. Food Factory of the plant _____

c. Process of making food by green plants _____

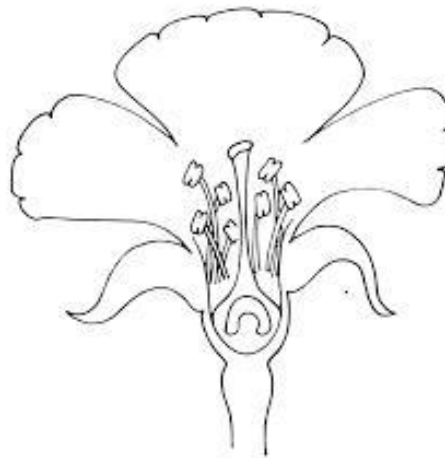
d. Tiny pores on the surface of leaves _____

e. Baby plant inside a seed _____

f. Group of petals _____

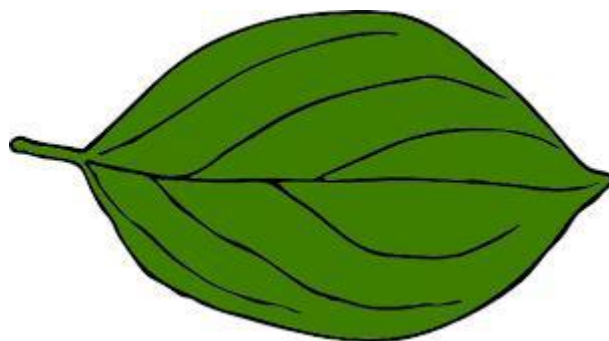


Q2. Label the following diagrams :-



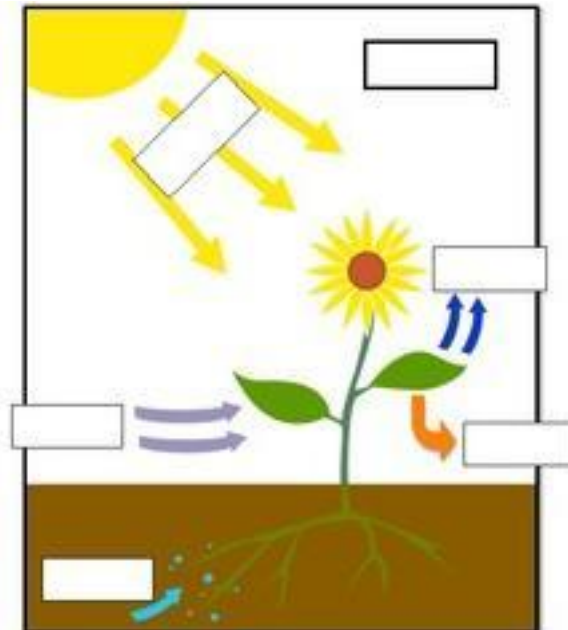
a.

Parts of a Typical Flower



b.

Parts of a Leaf



c.

Photosynthesis

Q3. Observe the following pictures carefully and answer the questions :-



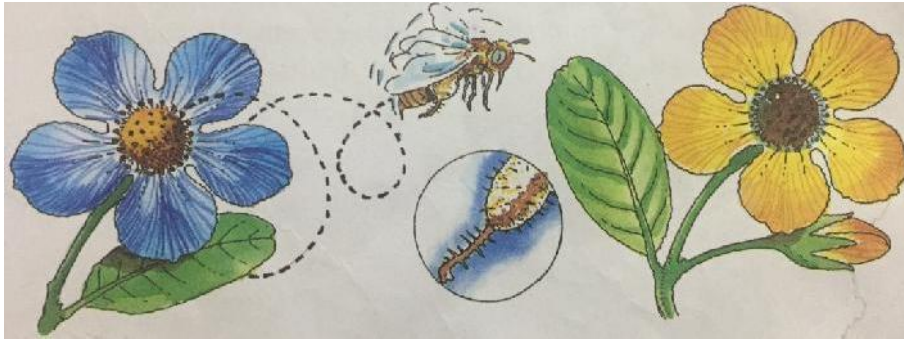
1. Which candle goes out first? Give reason.



2.a) Which seedlings show better growth ?

b) Why are seedlings in other pot show poor growth ?


Q4. Identify the process – name and define it.



Q5. Thinking Zone :-

Farmers and gardeners sow seeds at proper distance from each other.





WORKSHEET -2

Plants Are Useful

Q1. Write down any 4 uses of plants .



Q2. Observe the following pictures carefully and answer the questions :-



1. a) Name the family from which these plants belong.

b) Name some plants of this family.

c) Why do plants of this family are very important to us?

Q3. Draw and label any 'Food-Chain'.



Q4. Identify and write down the uses of the following medicinal plants .





SOCIAL STUDIES

WORKSHEET-1

CH-1(LOOKING AT OUR WORLD)

Q1 Answer the following in brief:-

1) What do you mean by Sea Level?

2) Why do we use Compass?

3) Which country is a part of two Continents?

Q2 Differentiate between Globes and Maps

GLOBES	MAPS

Q3 Think and Answer:

The surface of the Earth is not even.

Q4 Mention any two disadvantages of using a Globe.

Q5 Draw Symbols of Bridge, Unmetalled road, Railway, Stream

Q6 Mark and Colour the following:-

- a) White Continent**
- b) Largest Continent**
- c) Largest Ocean**
- d) An ocean that is named after the Country India**



Q4 What is the occupation of the people of Jammu and Kashmir?

Q5 Mark and colour the following:-

- a) A state that receives the heaviest rainfall b)
Tripura
- c) A state that is famous for tea plantations
- d) Sikkim
- e) Largest state among the Seven Sisters

